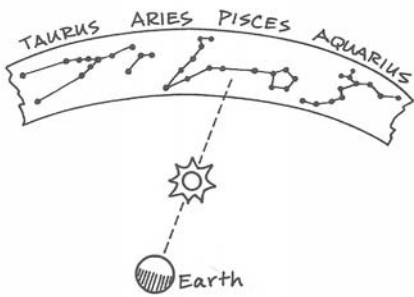
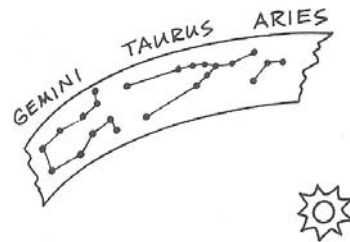


# Constellation "Think" Questions

(from *Constellations for Every Kid* by Janice VanCleave)



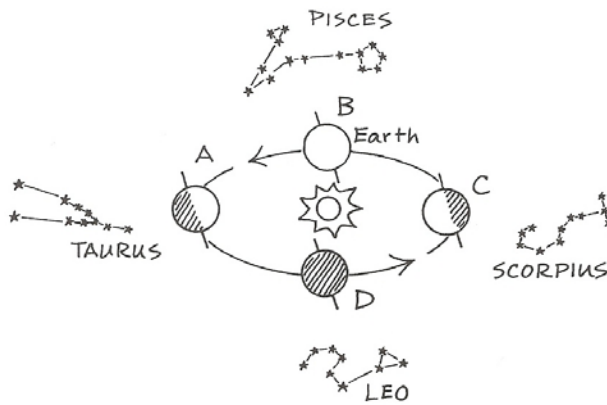
1. Look at the picture. In what constellation would you see the Sun?



2. Look at the picture. In what constellation would you see the Sun?

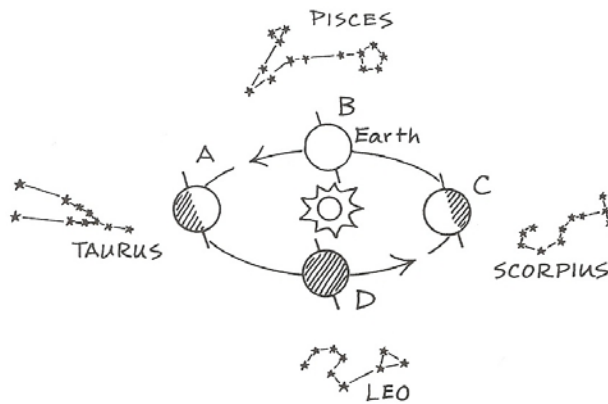


3. Look carefully at the picture.



- In what constellation would you see the sun if it were in Position D?
- In what constellation would you see the sun if it were in Position A?
- In what constellation would you see the sun if it were in Position B?
- In what constellation would you see the sun if it were in Position C?

4. Look carefully at the picture.



- a. What constellation would you see at night if the Earth were in position D?
- b. What constellation would you see at night if the Earth were in position A?
- c. What constellation would you see at night if the Earth were in position B?
- d. What constellation would you see at night if the Earth were in position C?

In the picture above, when Earth is at position A, it is Winter. When Earth is at position B, it is Spring. When Earth is at position C, it is Summer. When Earth is at position D, it is Autumn.

List four constellations that can be seen during that season.

Winter

- a.
- b.
- c.
- d.

## Spring

a.

b.

c.

d.

## Summer

a.

b.

c.

d.

## Autumn

a.

b.

c.

d.